


-SPECIAL EDUCATION- GROCERY STORE BUDGETING



FREE SAMPLE

THANK YOU!

Terms of Use

THIS DOCUMENT, IN ITS ENTIRETY, IS COPYRIGHTED. YOU MAY NOT CLAIM ANY PART OF IT AS YOUR OWN. YOU MAY NOT SHARE OR SELL ANY PART OF THIS PRODUCT. THIS PRODUCT IS DESIGNED FOR PERSONAL USE IN ONE CLASSROOM ONLY. WANT TO SHARE THIS WITH YOUR TEACHER FRIENDS? FOR USE IN MULTIPLE CLASSROOMS, PLEASE PURCHASE ADDITIONAL LICENSES AT THE DISCOUNTED RATE. I WORK HARD TO PROVIDE RESOURCES FOR YOUR USE THAT ARE CONVENIENT AND AFFORDABLE. PLEASE RESPECT MY WORK BY RESPECTING MY TERMS OF USE.

MISS LULU
special ed

Graphics & Fonts From:



Earn Free Or Discounted Products
BY LEAVING FEEDBACK ON
YOUR PURCHASES, YOU CAN
EARN CREDITS THAT WILL SAVE
YOU MONEY ON FUTURE TPT
PURCHASES! LEARN MORE
ABOUT TPT CREDITS [HERE](#).

INSTRUCTIONS:

Students will use the aisle menu to complete the worksheets and task cards.

Which Costs More? Worksheets

1. Find the first item on the menu. Write the price.
2. Find the second item on the menu. Write the price.
3. Circle the item that costs more.

Do You Have Enough Money? Worksheets

There are 2 levels of this worksheet included for each menu. The first worksheet uses only \$1 bills. The second worksheet uses \$1 and \$5 bills.

1. Count the money in your wallet and write the amount in the square.
2. Find the price of the item on the menu.
3. Determine if the amount of money in your wallet is enough to purchase the item.
4. Circle Yes or No.

AISLE 4

BAKING



\$1.00




\$2.00



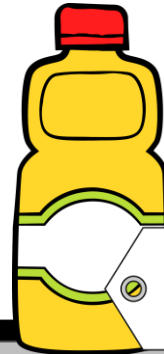
\$2.00



\$4.00



\$1.00



\$2.00



\$6.00



\$6.00

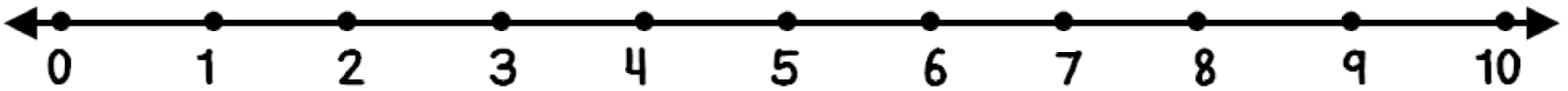


\$4.00

LEVEL 1

WHICH COSTS MORE?

Write the price. Circle the item that costs more.



\$ ____ . ____




\$ ____ . ____




\$ ____ . ____




\$ ____ . ____



\$ ____ . ____



\$ ____ . ____




\$ ____ . ____



\$ ____ . ____



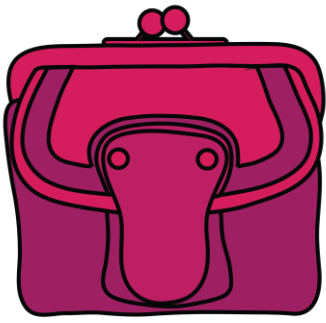
\$ ____ . ____



\$ ____ . ____

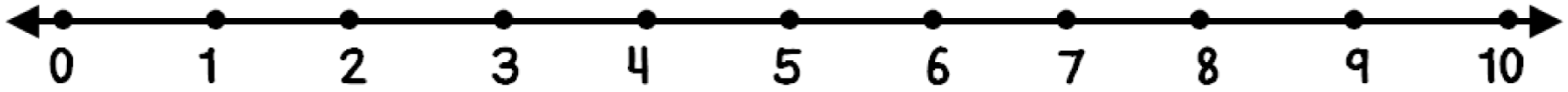


DO YOU HAVE ENOUGH MONEY?




I have

\$



yes

no



yes

no



yes

no




yes

no



yes

no



yes

no




yes

no



yes


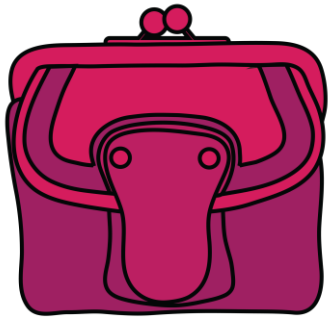
no



yes

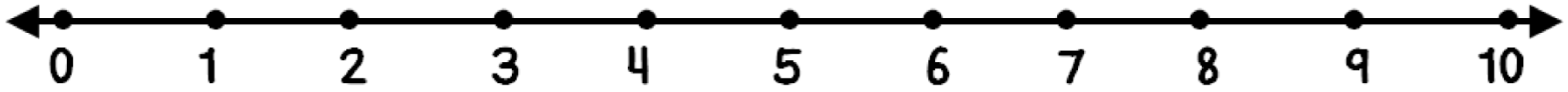
no

DO YOU HAVE ENOUGH MONEY?




I have

\$



yes no



yes no




yes no



yes no



yes no




yes no



yes no



yes no




yes no

AISLE 4

BAKING



\$1.17




\$2.49



\$2.15



\$4.53



\$1.29



\$2.09



\$5.40



\$6.99

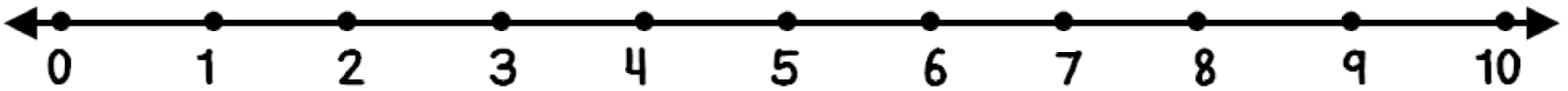


\$4.12

LEVEL 2

WHICH COSTS MORE?

Write the price. Circle the item that costs more.



\$ ____ . ____




\$ ____ . ____




\$ ____ . ____




\$ ____ . ____



\$ ____ . ____



\$ ____ . ____



\$ ____ . ____



\$ ____ . ____



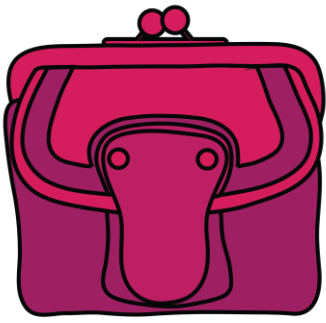
\$ ____ . ____



\$ ____ . ____

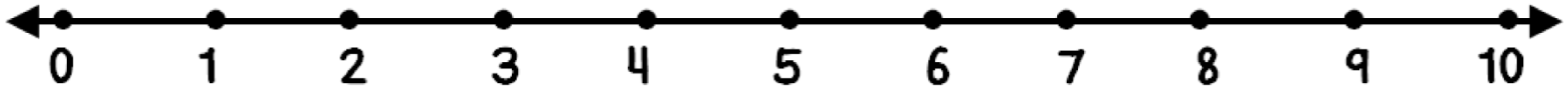


DO YOU HAVE ENOUGH MONEY?




I have

\$



yes no



yes no




yes no



yes no



yes no




yes no



yes no

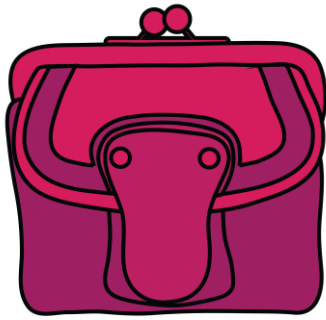


yes no



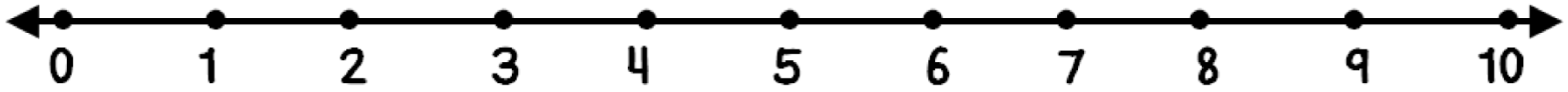
yes no

DO YOU HAVE ENOUGH MONEY?




I have

\$



yes no



yes no




yes no



yes no



yes no




yes no



yes no



yes no




yes no

AISLE 4

BAKING



\$1.17



\$2.49



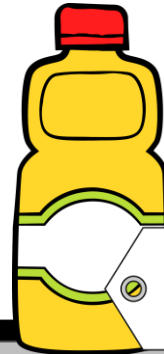
\$2.15



\$4.53



\$1.29



\$2.09



\$5.40



\$6.99

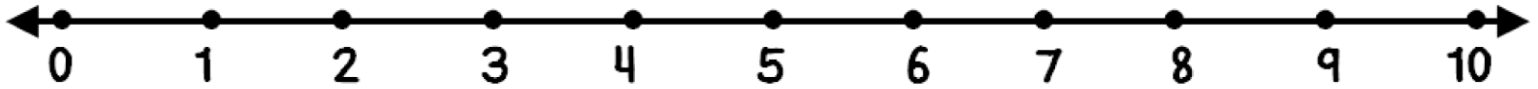












\$4.12

LEVEL 2

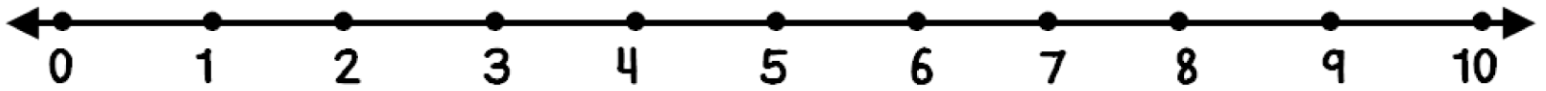
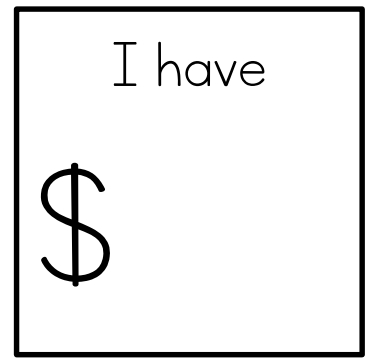
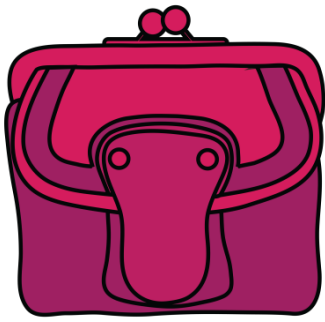
WHICH COSTS MORE?

Write the price of each item. Add the prices. Circle the total that costs more.




$\$ \underline{\hspace{1cm}}.\underline{\hspace{1cm}}$ $+ \$ \underline{\hspace{1cm}}.\underline{\hspace{1cm}}$ $\$ \underline{\hspace{1cm}}.\underline{\hspace{1cm}}$		$\$ \underline{\hspace{1cm}}.\underline{\hspace{1cm}}$ $+ \$ \underline{\hspace{1cm}}.\underline{\hspace{1cm}}$ $\$ \underline{\hspace{1cm}}.\underline{\hspace{1cm}}$	
$\$ \underline{\hspace{1cm}}.\underline{\hspace{1cm}}$ $+ \$ \underline{\hspace{1cm}}.\underline{\hspace{1cm}}$ $\$ \underline{\hspace{1cm}}.\underline{\hspace{1cm}}$		$\$ \underline{\hspace{1cm}}.\underline{\hspace{1cm}}$ $+ \$ \underline{\hspace{1cm}}.\underline{\hspace{1cm}}$ $\$ \underline{\hspace{1cm}}.\underline{\hspace{1cm}}$	
$\$ \underline{\hspace{1cm}}.\underline{\hspace{1cm}}$ $+ \$ \underline{\hspace{1cm}}.\underline{\hspace{1cm}}$ $\$ \underline{\hspace{1cm}}.\underline{\hspace{1cm}}$		$\$ \underline{\hspace{1cm}}.\underline{\hspace{1cm}}$ $+ \$ \underline{\hspace{1cm}}.\underline{\hspace{1cm}}$ $\$ \underline{\hspace{1cm}}.\underline{\hspace{1cm}}$	
$\$ \underline{\hspace{1cm}}.\underline{\hspace{1cm}}$ $+ \$ \underline{\hspace{1cm}}.\underline{\hspace{1cm}}$ $\$ \underline{\hspace{1cm}}.\underline{\hspace{1cm}}$		$\$ \underline{\hspace{1cm}}.\underline{\hspace{1cm}}$ $+ \$ \underline{\hspace{1cm}}.\underline{\hspace{1cm}}$ $\$ \underline{\hspace{1cm}}.\underline{\hspace{1cm}}$	
$\$ \underline{\hspace{1cm}}.\underline{\hspace{1cm}}$ $+ \$ \underline{\hspace{1cm}}.\underline{\hspace{1cm}}$ $\$ \underline{\hspace{1cm}}.\underline{\hspace{1cm}}$		$\$ \underline{\hspace{1cm}}.\underline{\hspace{1cm}}$ $+ \$ \underline{\hspace{1cm}}.\underline{\hspace{1cm}}$ $\$ \underline{\hspace{1cm}}.\underline{\hspace{1cm}}$	

DO YOU HAVE ENOUGH MONEY?



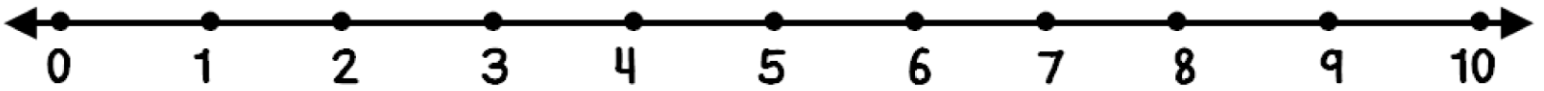
 <p>yes no</p>	 <p>yes no</p>	 <p>yes no</p>
 <p>yes no</p>	 <p>yes no</p>	 <p>yes no</p>
 <p>yes no</p>	 <p>yes no</p>	 <p>yes no</p>

DO YOU HAVE ENOUGH MONEY?



I have

\$



<p>yes no</p>	<p>yes no</p>	<p>yes no</p>
<p>yes no</p>	<p>yes no</p>	<p>yes no</p>
<p>yes no</p>	<p>yes no</p>	<p>yes no</p>

SHOPPING LIST 13



baking
powder \$_____



cake mix \$_____



flour \$_____

TOTAL \$_____

SHOPPING LIST 14



sprinkles \$_____



frosting \$_____



sugar \$_____

TOTAL \$_____

SHOPPING LIST 15



sprinkles \$_____



frosting \$_____



brownie mix \$_____

TOTAL \$_____

SHOPPING LIST 16



sugar \$_____



cooking oil \$_____



flour \$_____

TOTAL \$_____

SHOPPING LIST 13



baking powder \$_____



cake mix \$_____



flour \$_____



brownie mix \$_____

TOTAL \$_____

SHOPPING LIST 14



sprinkles \$_____



frosting \$_____



sugar \$_____



baking powder \$_____

TOTAL \$_____

SHOPPING LIST 15



sprinkles \$_____



frosting \$_____



brownie mix \$_____



cake mix \$_____

TOTAL \$_____

SHOPPING LIST 16



sugar \$_____



cooking oil \$_____




flour \$_____



baking powder \$_____

TOTAL \$_____


29



You have

\$

You want to buy-



Do you have enough money?


 YES

 NO

GROCERY STORE BUDGETING: \$1 BILLS

@MISS LULU

30



You have

\$

You want to buy-



Do you have enough money?

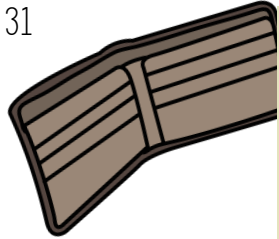
 YES

 NO

GROCERY STORE BUDGETING: \$1 BILLS

@MISS LULU

31



You have

\$

You want to buy-



Do you have enough money?


 YES

 NO

GROCERY STORE BUDGETING: \$1 BILLS

@MISS LULU

32



You have

\$

You want to buy-



Do you have enough money?

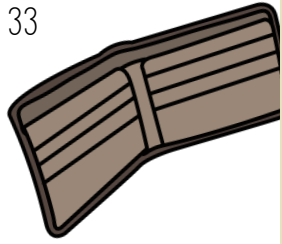
 YES

 NO

GROCERY STORE BUDGETING: \$1 BILLS

@MISS LULU

33



You have

\$

You want to buy-



Do you have enough money?


YES

NO

GROCERY STORE BUDGETING: \$1 BILLS

@MISS LULU

34



You have

\$

You want to buy-



Do you have enough money?

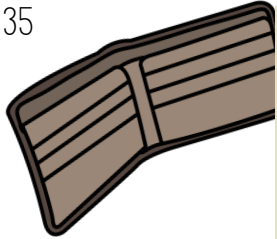
YES

NO

GROCERY STORE BUDGETING: \$1 BILLS

@MISS LULU

35



You have

\$

You want to buy-



Do you have enough money?

YES

NO

GROCERY STORE BUDGETING: \$1 BILLS

@MISS LULU

36



You have

\$

You want to buy-



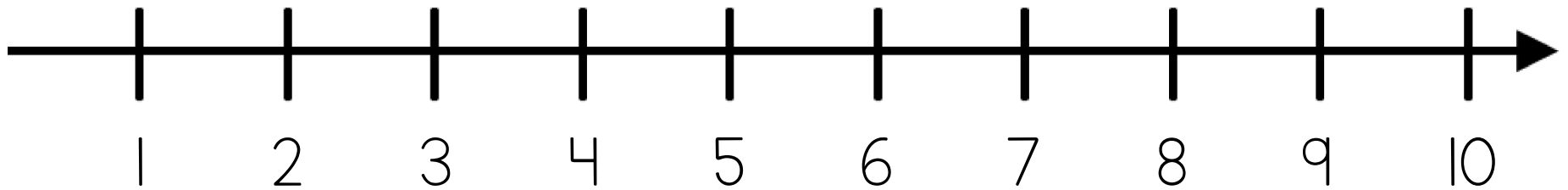
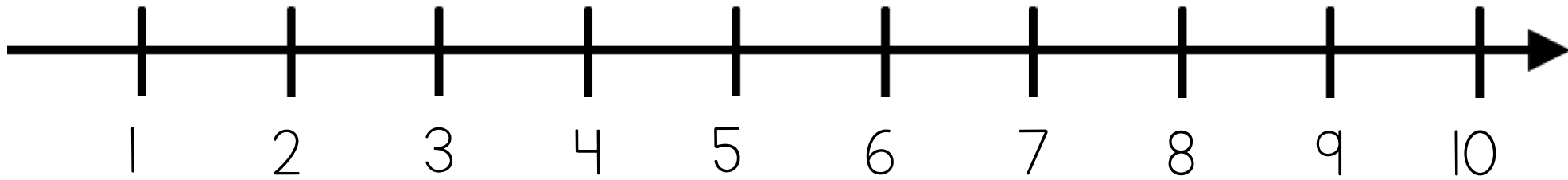

Do you have enough money?

YES



NO

GROCERY STORE BUDGETING: \$1 BILLS



@MISS LULU





DOLLAR MORE STRATEGY

FIRST	THEN
<p>Pay the dollar amount.</p> <p>\$4.78</p> 	<p>Pay one dollar more to cover the change.</p> <p>\$4.78</p> 



DOLLAR MORE STRATEGY

FIRST	THEN
<p>Pay the dollar amount.</p> <p>\$4.78</p> 	<p>Pay one dollar more to cover the change.</p> <p>\$4.78</p> 

DOLLAR MORE STRATEGY

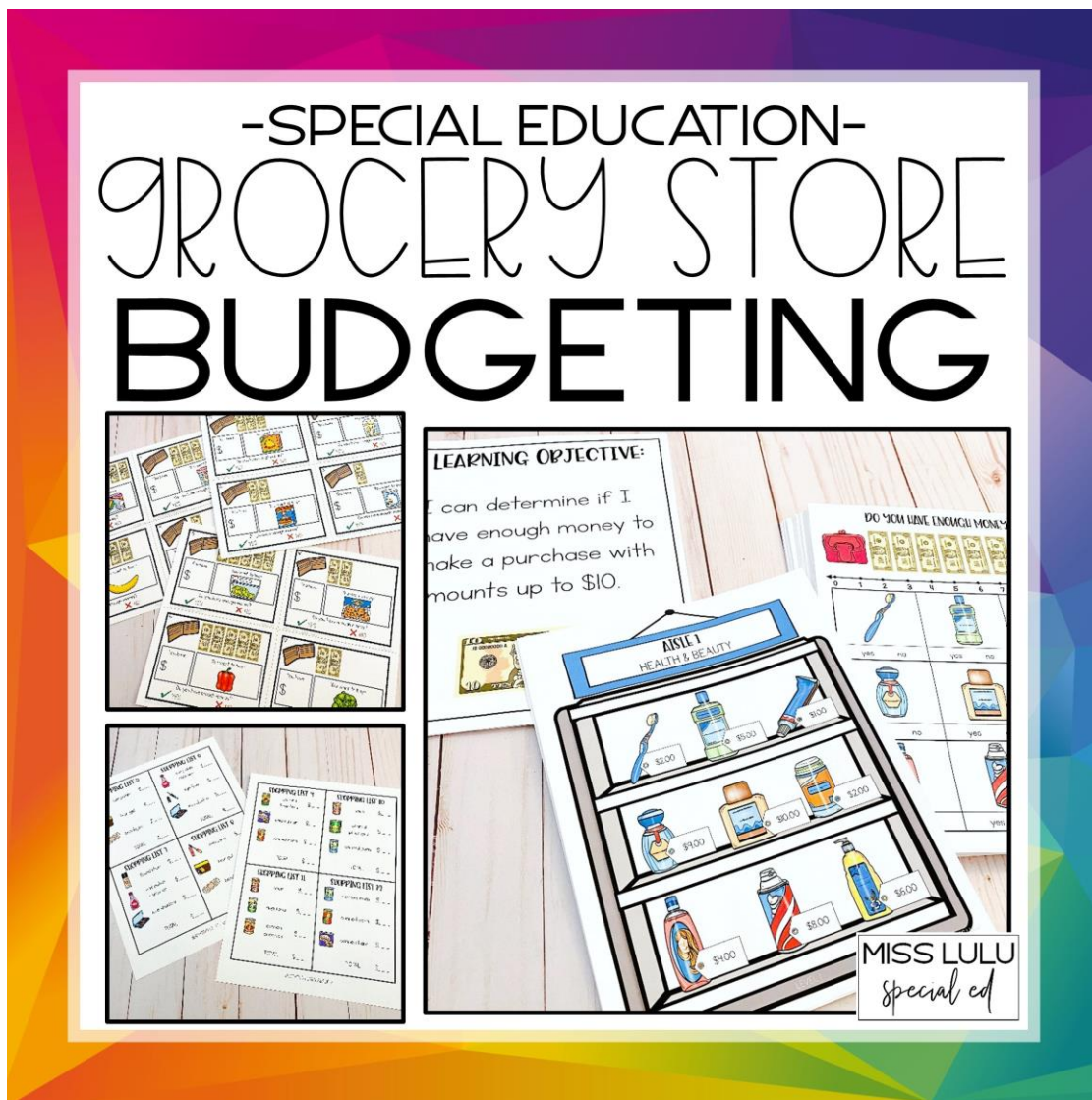
FIRST	THEN
<p>Pay the dollar amount.</p> <p>\$12.89</p> 	<p>Pay one dollar more to cover the change.</p> <p>\$12.89</p> 

DOLLAR MORE STRATEGY


FIRST	THEN
<p>Pay the dollar amount.</p> <p>\$12.89</p> 	<p>Pay one dollar more to cover the change.</p> <p>\$12.89</p> 



GRAB THE FULL VERSION HERE.



ALSO AVAILABLE:

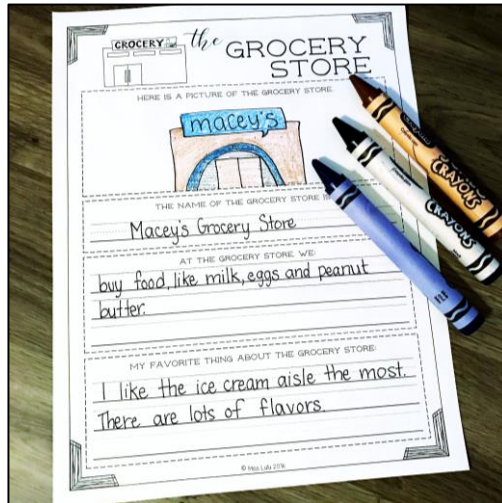


THREE LEVELS

AMOUNTS UP TO \$20

FREEBIES & GIVEAWAYS

Get access to exclusive freebies, tips and discounts by signing up for the Miss Lulu Special Ed newsletter!



MISS LULU
special ed

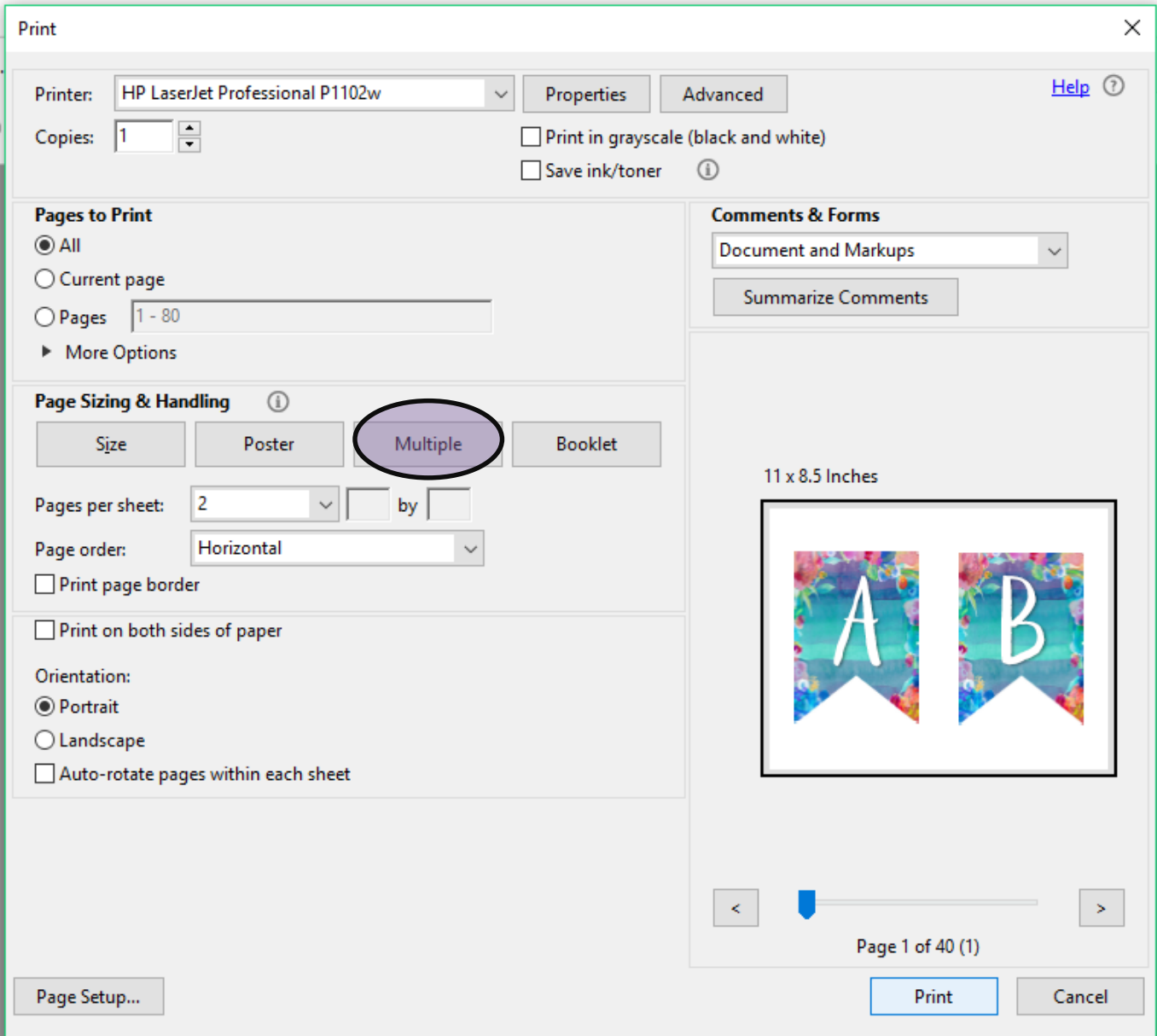
SAVE INK. PRINT SMALLER.

how to print multiple pages per sheet

Adobe Acrobat Reader DC

Help

PowerPoint Present...



1. File-Print.
2. Under "Page Sizing & Handling, select "Multiple."
3. Pick the number of pages per sheet.
4. Adjust page orientation as needed.
5. Print!

PRINTING RECOMMENDATIONS

affiliate links



Get 1 free month of HP Instant
Ink by clicking here.

MISS LULU
special ed

LET'S CONNECT!

BLOG

TPT

DECOR



You
Tube

MISS LULU
special ed